













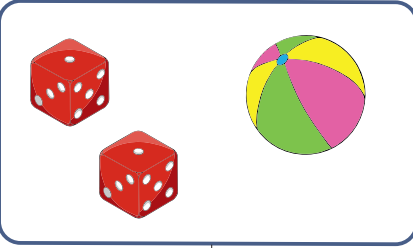
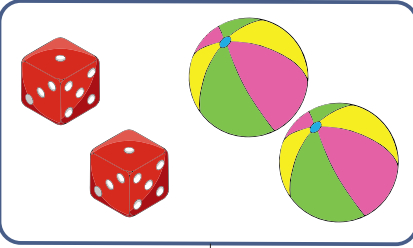


## Rechnen mit Geld - für kluge Köpfchen



Wie viel kosten die Sachen?

 7 €	 9 €	 = ____ €  = ____ €
--	---	--

 8 €	 13 €	 = ____ €  = ____ €
--	--	--

 8 €	 14 €	 = ____ €  = ____ €
--	--	--



## Lösungen

### Rechnen mit Geld - für kluge Köpfchen



Wie viel kosten die Sachen?

--	--	------

--	--	------

--	--	------













## Lösungen

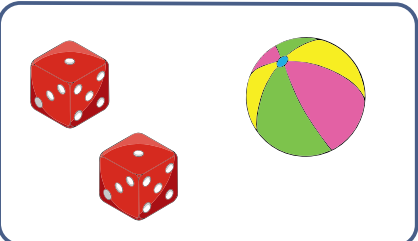
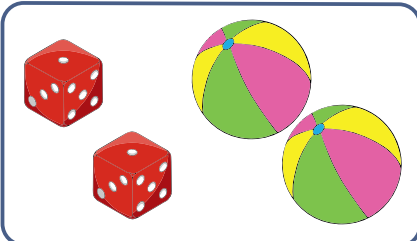


### Rechnen mit Geld - für kluge Köpfchen



Wie viel kosten die Sachen?

		 = <u>4</u> €
<input type="text" value="7 €"/>	<input type="text" value="9 €"/>	 = <u>3</u> €

		 = <u>5</u> €
<input type="text" value="8 €"/>	<input type="text" value="13 €"/>	 = <u>3</u> €

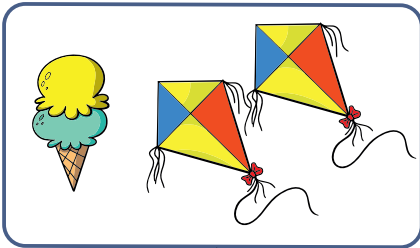
		 = <u>1</u> €
<input type="text" value="8 €"/>	<input type="text" value="14 €"/>	 = <u>6</u> €

## Lösungen


### Rechnen mit Geld - für kluge Köpfchen



Wie viel kosten die Sachen?



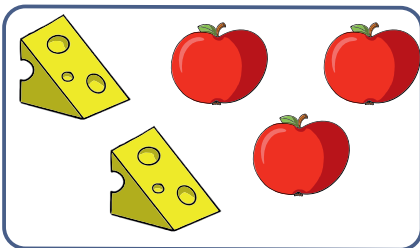
21 €



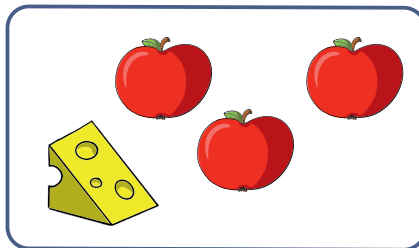
15 €

$$\text{Ice cream cone} = \underline{3} \text{ €}$$

$$\text{Kite} = \underline{9} \text{ €}$$




11 €




7 €

$$\text{Cheese slice} = \underline{4} \text{ €}$$

$$\text{Apple} = \underline{1} \text{ €}$$



28 €



18 €

$$\text{Lollipop} = \underline{2} \text{ €}$$

$$\text{Cap} = \underline{5} \text{ €}$$